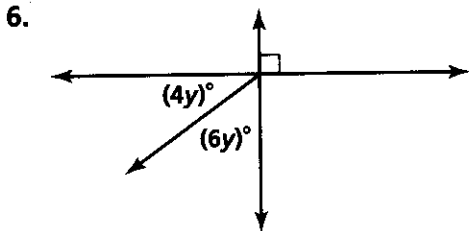
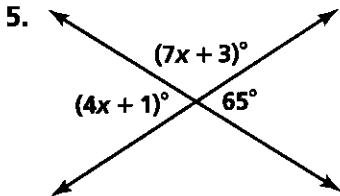
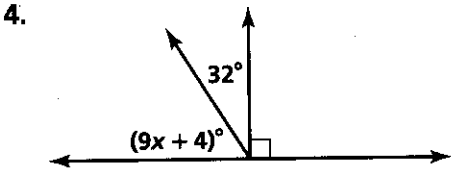
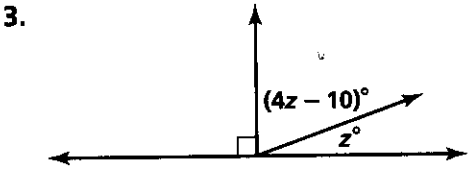
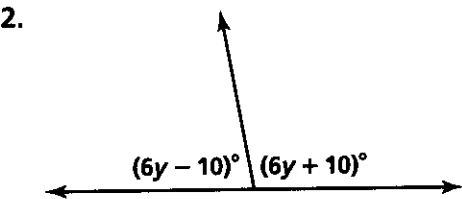
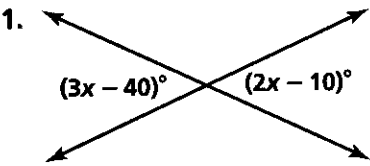


Practice 2-5

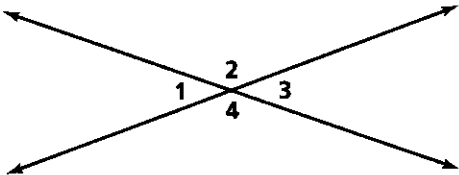
Proving Angles Congruent

Find the values of the variables.

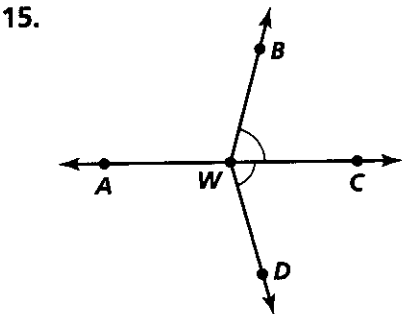
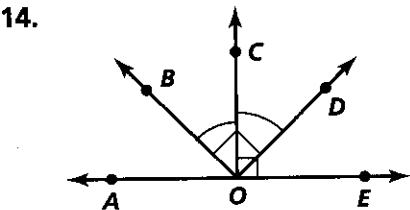
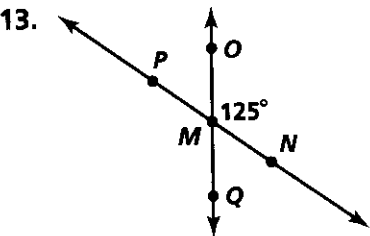


Write true or false.

- 7. $\angle 1$ and $\angle 2$ are vertical angles.
- 8. $\angle 2$ and $\angle 3$ are supplementary angles.
- 9. $m\angle 1 = m\angle 3$
- 10. $m\angle 3 + m\angle 4 = 180$
- 11. $m\angle 1 + m\angle 3 = 180$
- 12. $\angle 4$ and $\angle 2$ are adjacent angles.



Write three conclusions that can be drawn from each figure.



All rights reserved.

© Pearson Education, Inc., publishing as Pearson Prentice Hall.